

DĚSETIŠKA  
ŠTEVILA  
ponovim




10 ENIC

$$1 + 1 + 1 + 1 + 1 + 1 + 1 + 1 + 1 + 1 = 10$$



1 DESETICA



10 ENIC

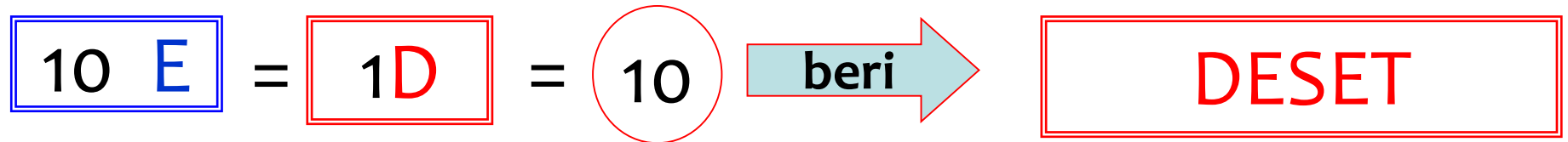
=

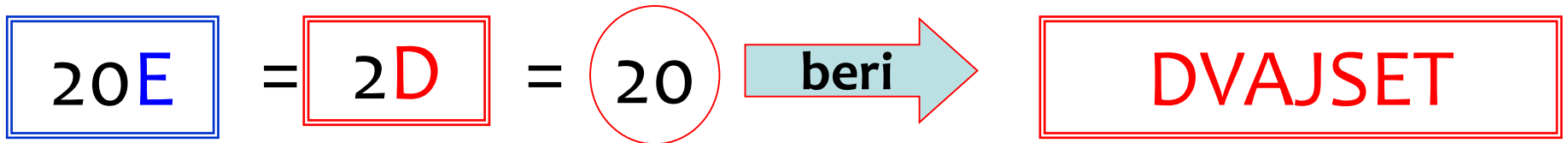
1DSEETICA


10 E

=

1D







30E

=

3D

=

30



TRIDASET



$$\boxed{40E} = \boxed{4D} = \textcircled{40} \xrightarrow{\text{beri}} \boxed{\text{ŠTIRIDESET}}$$



$$\boxed{50E} = \boxed{5D} = \textcircled{50} \xrightarrow{\text{beri}} \boxed{\text{PETDESET}}$$





$$\boxed{60\text{E}} = \boxed{6\text{D}} = \textcircled{60} \xrightarrow{\text{beri}} \boxed{\text{ŠESTDESET}}$$



$$\boxed{70E} = \boxed{7D} = \textcircled{70} \xrightarrow{\text{beri}} \boxed{\text{SEDEMDESET}}$$



$$\boxed{80E} = \boxed{8D} = \textcircled{80} \xrightarrow{\text{beri}} \boxed{\text{OSEMDESET}}$$



$$\boxed{90E} = \boxed{9D} = \textcircled{90} \xrightarrow{\text{beri}} \boxed{\text{DEVETDESET}}$$



100E

=

10D

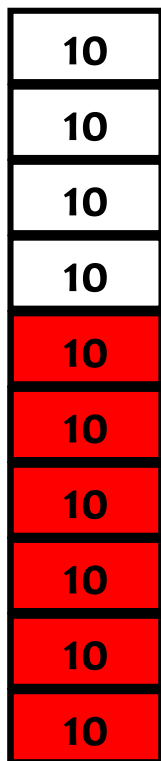
=

100

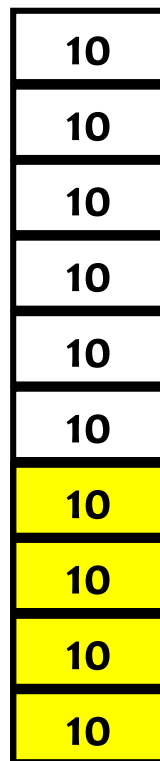


STO


Pobarvaj.




60



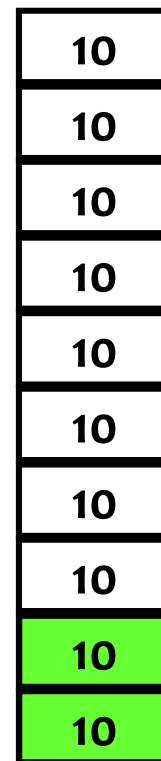
40



100





70



20

Česa je več,  ali  ?



4D

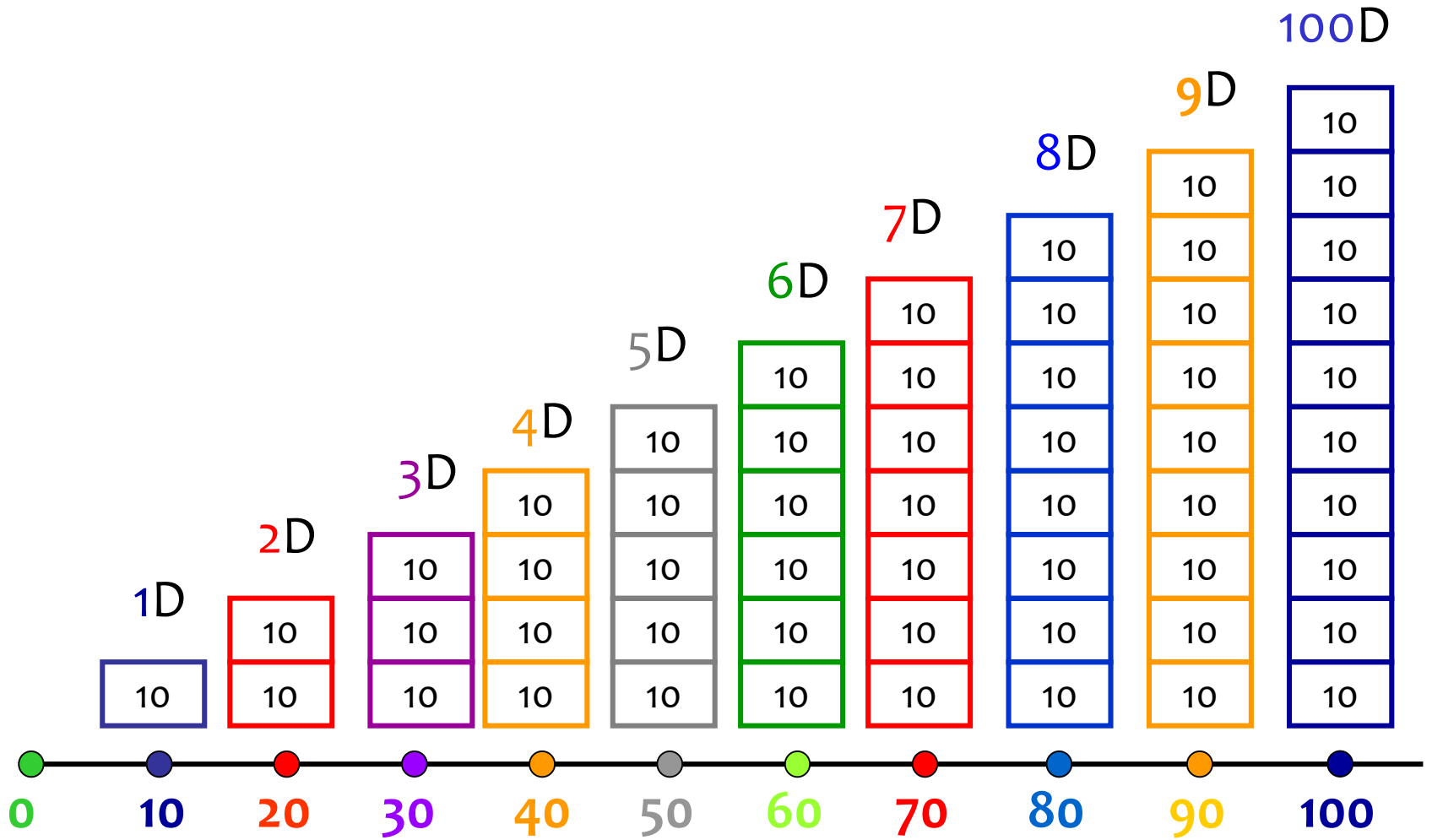
>

2D

40

>

20



**0 < 10 < 20 < 30 < 40 < 50 < 60 < 70 < 80 < 90 < 100**



# BESEDILNE NALOGE Z DESETICAMI

1. V 2. a razredu je 20 učencev, v 2. b razredu pa 30 učencev. Koliko učencev je v obeh razredih?

Račun: \_\_\_\_\_

Odgovor: \_\_\_\_\_



**Naloga rešuj v zvezek. Primer zapisa v zvezek:**

## BESEDILNE NALOGE Z DESETICAMI

1. R:  $20 + 30 = 50$

O: V obeh razredih je 50 učencev.

# BESEDILNE NALOGE Z DESETICAMI

2. Sosedov Janez je imel 20 krav, 10 koz in 30 prašičev.  
Koliko živali je imel?

Račun: \_\_\_\_\_

Odgovor: \_\_\_\_\_



3. Kolikšna je razlika števil 100 in 70?

Račun: \_\_\_\_\_

Odgovor: \_\_\_\_\_



# BESEDILNE NALOGE Z DESETICAMI

4. V Larini družini so mama, oče, dedek, babica in bratec Jakob. V sadovnjaku je vsak član družine nabral 10 jabolk. Koliko jabolk je nabrala Larina družina?

Račun: \_\_\_\_\_

Odgovor: \_\_\_\_\_



5. Mama je v trgovini kupila 30 litrov olja, naslednji dan pa še 20 litrov. Med vikendom je 10 litrov olja porabila. Koliko litrov olja ji je ostalo?

Račun: \_\_\_\_\_

Odgovor: \_\_\_\_\_



# BESEDILNE NALOGE Z DESETICAMI

Sedaj pa klikni na sliko in reši še nekaj nalog.

