

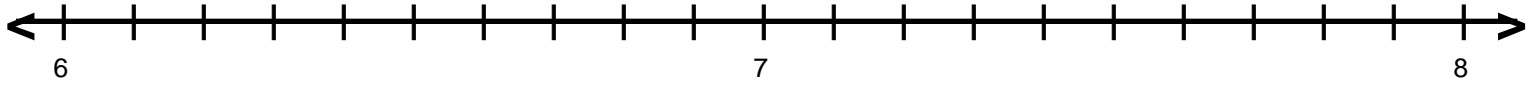
Name : _____

Score : _____

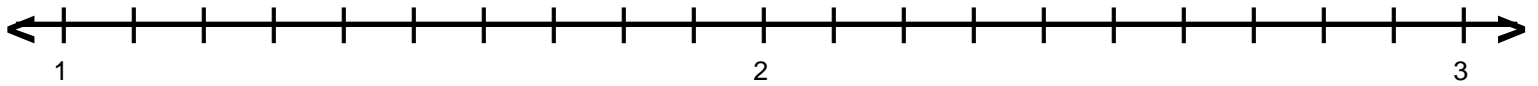
Teacher : _____

Date : _____

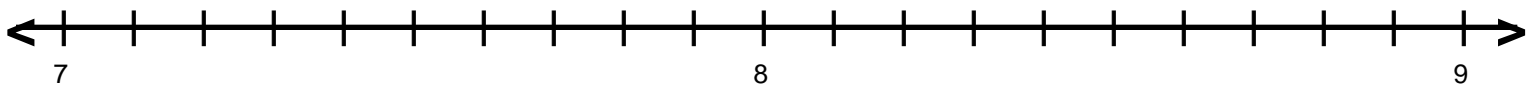
Decimal Numbers on Number Lines



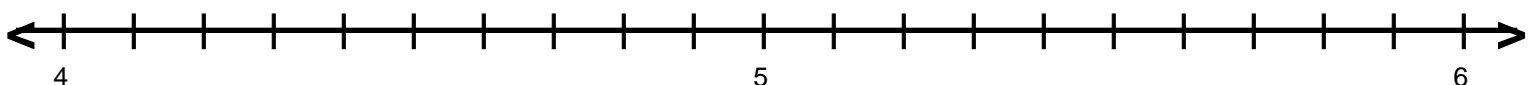
A = 6.2 B = 7.9 C = 6.4 D = 7.6



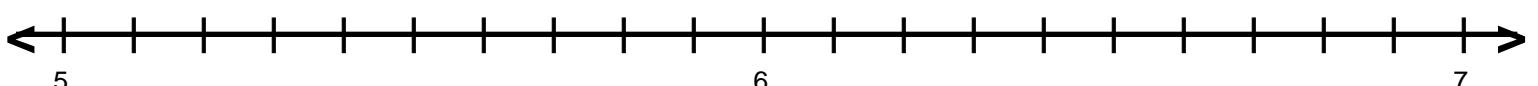
A = 1.6 B = 1.7 C = 2.2 D = 2.5



A = 7.1 B = 7.2 C = 7.5 D = 8.9



A = 5.9 B = 4.3 C = 5.2 D = 4.7



A = 5.1 B = 6.4 C = 5.7 D = 6.3

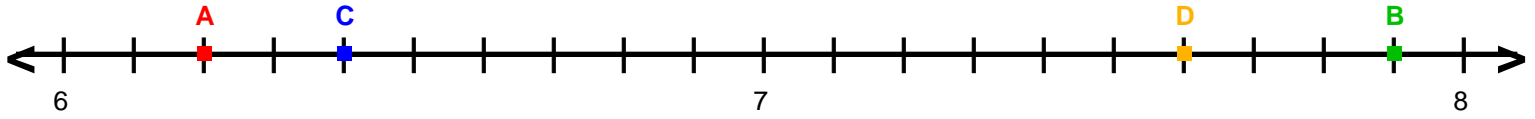
Name : _____

Score : _____

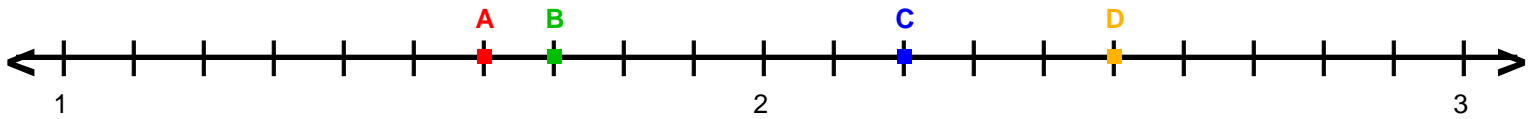
Teacher : _____

Date : _____

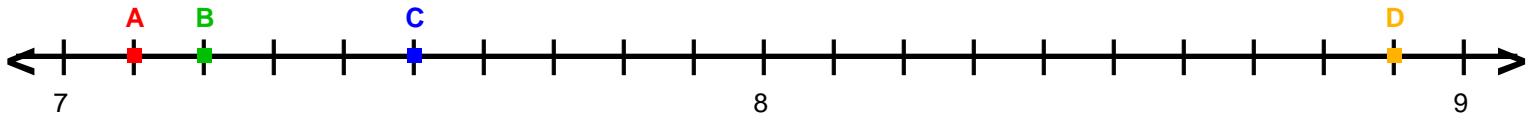
Decimal Numbers on Number Lines



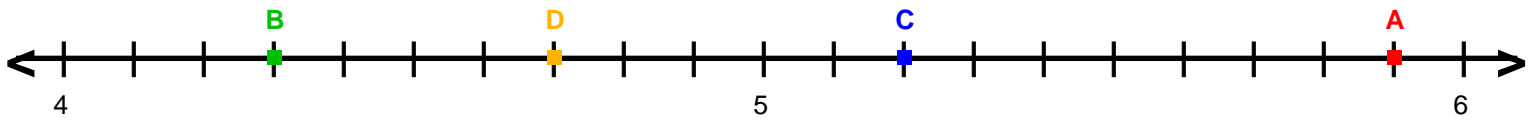
A = 6.2 B = 7.9 C = 6.4 D = 7.6



A = 1.6 B = 1.7 C = 2.2 D = 2.5



A = 7.1 B = 7.2 C = 7.5 D = 8.9



A = 5.9 B = 4.3 C = 5.2 D = 4.7



A = 5.1 B = 6.4 C = 5.7 D = 6.3