

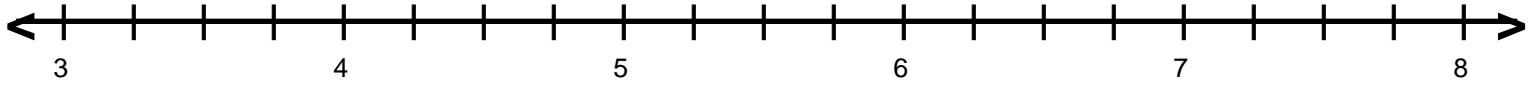
Name : _____

Score : _____

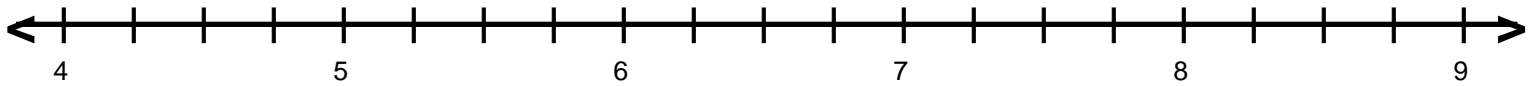
Teacher : _____

Date : _____

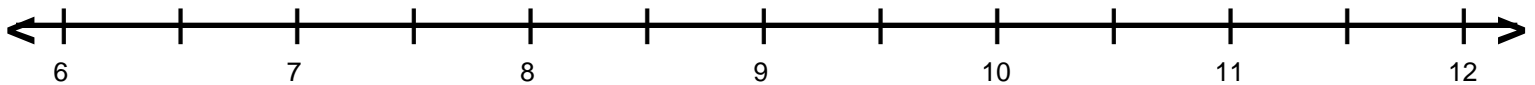
Decimal Numbers on Number Lines



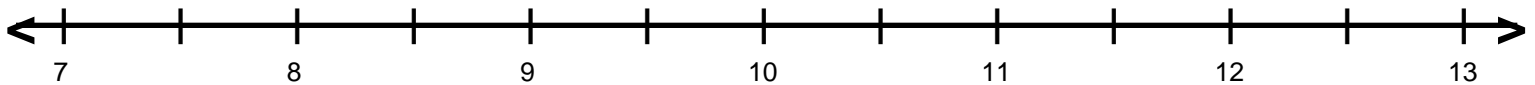
A = 5.25 B = 6.25 C = 3.5 D = 4.75



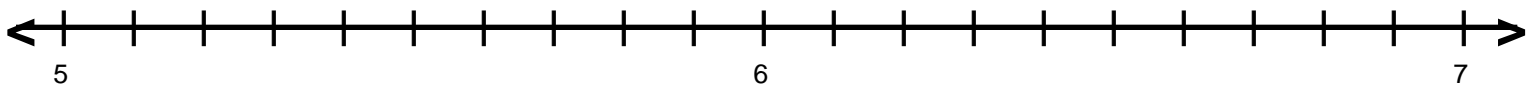
A = 7.75 B = 6.25 C = 4.5 D = 5.25



A = 7.5 B = 9.5 C = 8.5 D = 10.5



A = 9.5 B = 8.5 C = 7.5 D = 11.5



A = 6.5 B = 5.4 C = 5.8 D = 6.7

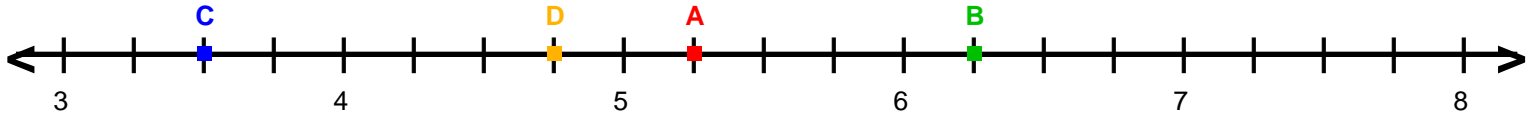
Name : _____

Score : _____

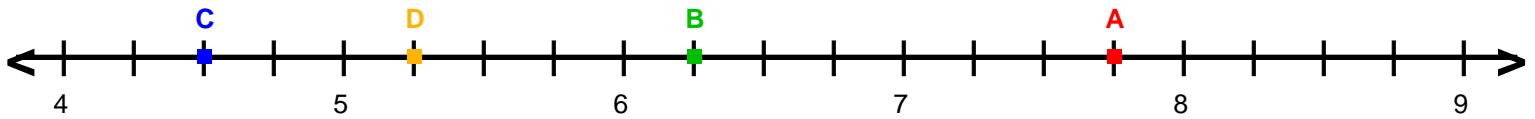
Teacher : _____

Date : _____

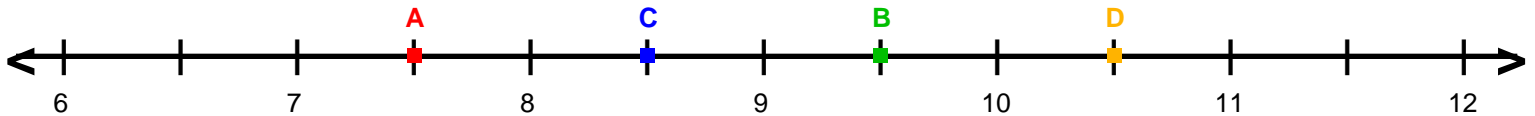
Decimal Numbers on Number Lines



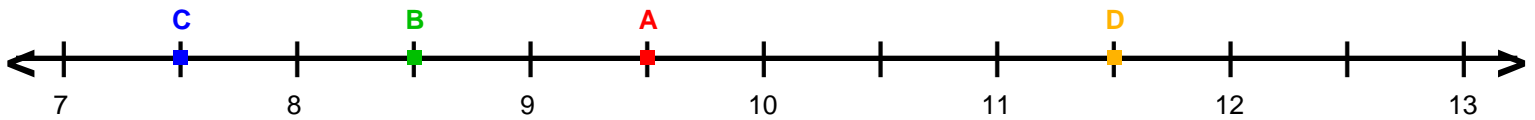
A = 5.25 B = 6.25 C = 3.5 D = 4.75



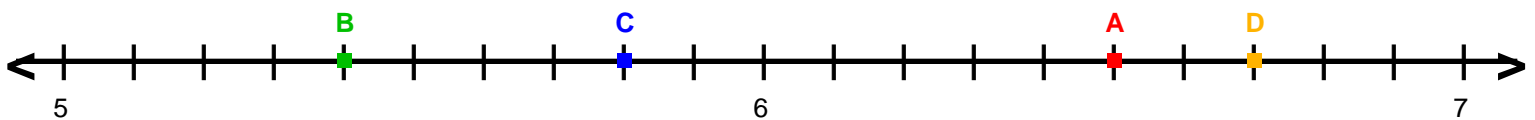
A = 7.75 B = 6.25 C = 4.5 D = 5.25



A = 7.5 B = 9.5 C = 8.5 D = 10.5



A = 9.5 B = 8.5 C = 7.5 D = 11.5



A = 6.5 B = 5.4 C = 5.8 D = 6.7