

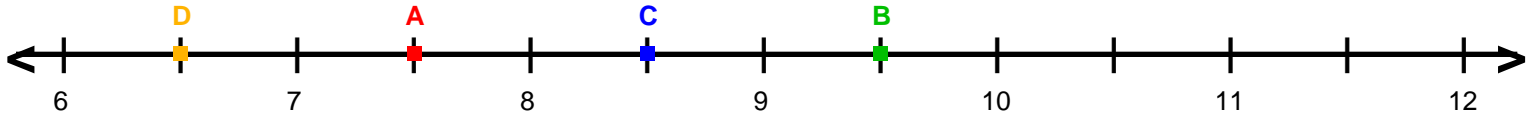
Name : _____

Score : _____

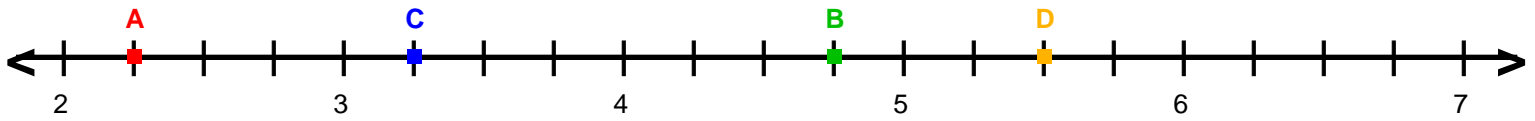
Teacher : _____

Date : _____

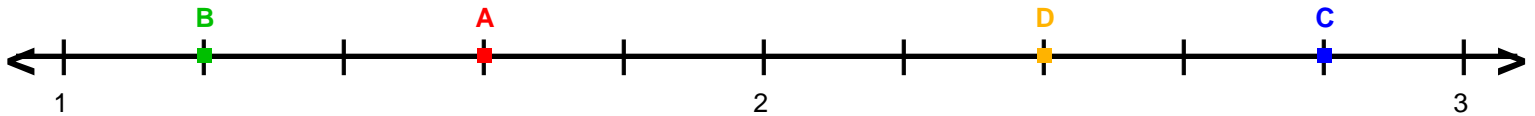
Decimal Numbers on Number Lines



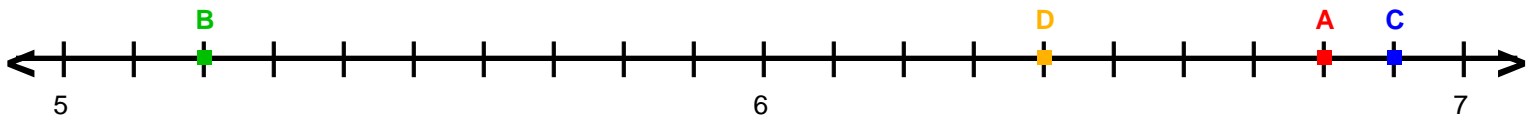
A = _____ B = _____ C = _____ D = _____



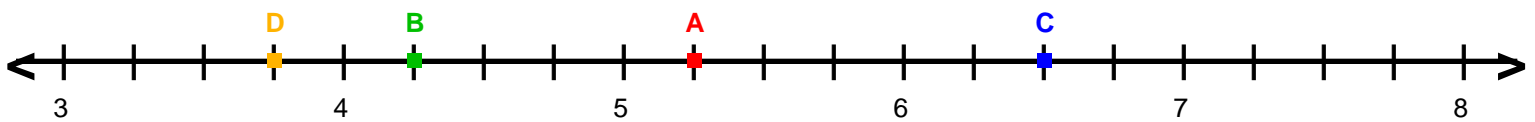
A = _____ B = _____ C = _____ D = _____



A = _____ B = _____ C = _____ D = _____



A = _____ B = _____ C = _____ D = _____



A = _____ B = _____ C = _____ D = _____

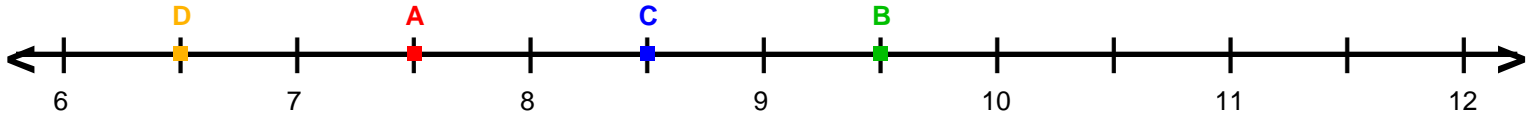
Name : _____

Score : _____

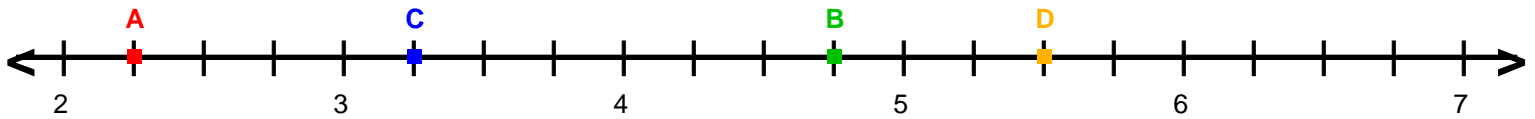
Teacher : _____

Date : _____

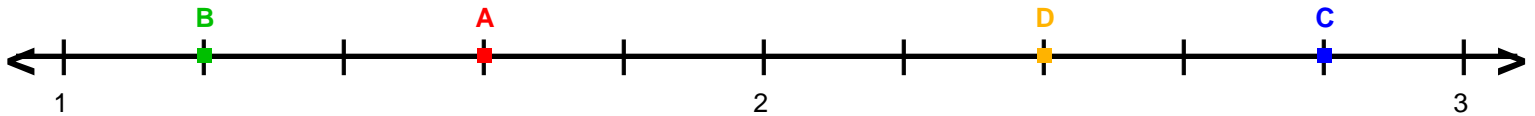
Decimal Numbers on Number Lines



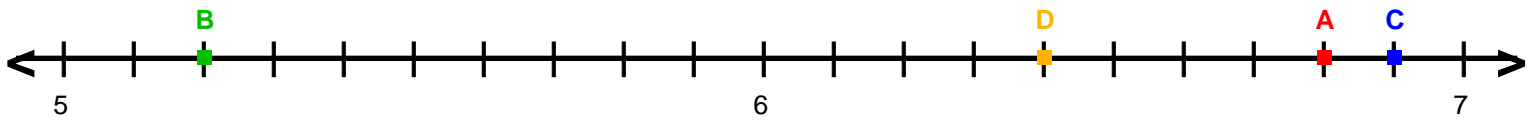
A = 7.5 B = 9.5 C = 8.5 D = 6.5



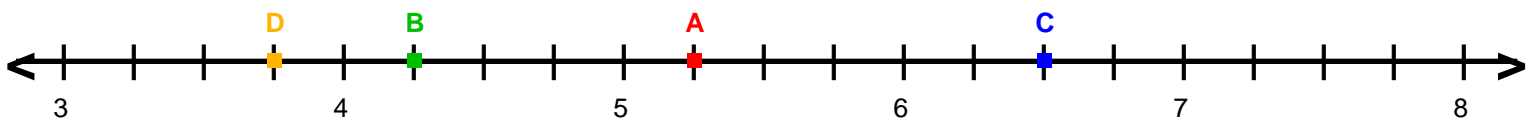
A = 2.25 B = 4.75 C = 3.25 D = 5.5



A = 1.6 B = 1.2 C = 2.8 D = 2.4



A = 6.8 B = 5.2 C = 6.9 D = 6.4



A = 5.25 B = 4.25 C = 6.5 D = 3.75