

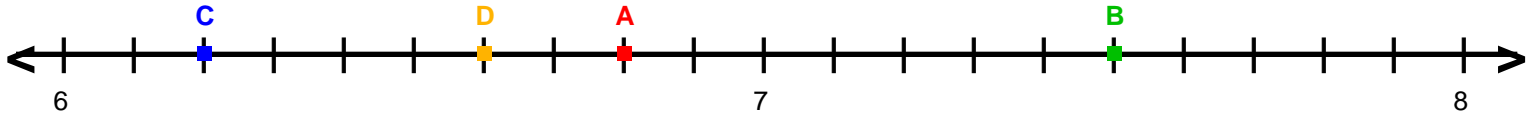
Name : _____

Score : _____

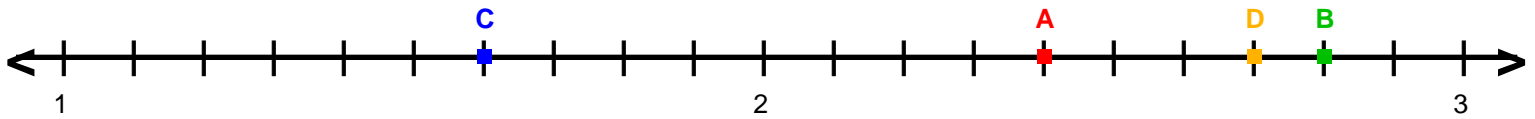
Teacher : _____

Date : _____

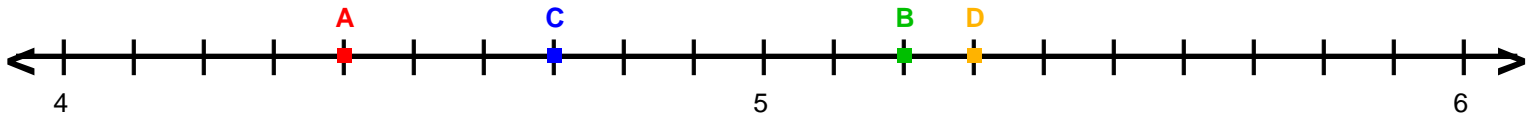
Decimal Numbers on Number Lines



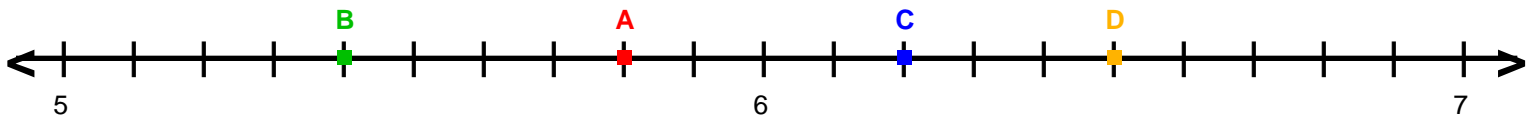
A = _____ B = _____ C = _____ D = _____



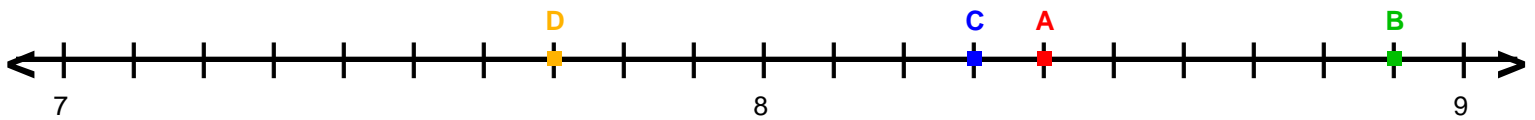
A = _____ B = _____ C = _____ D = _____



A = _____ B = _____ C = _____ D = _____



A = _____ B = _____ C = _____ D = _____



A = _____ B = _____ C = _____ D = _____

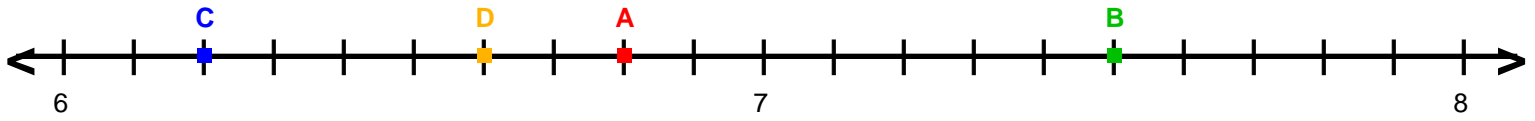
Name : _____

Score : _____

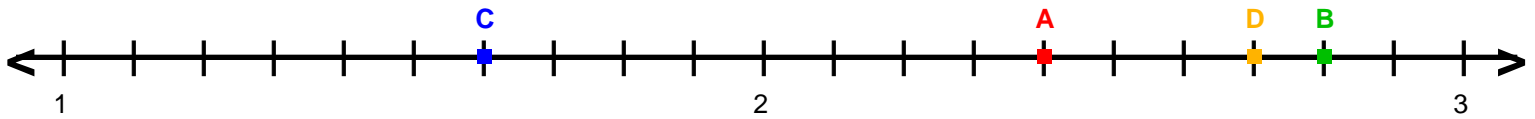
Teacher : _____

Date : _____

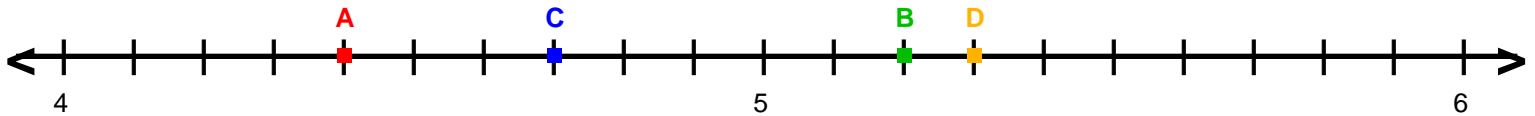
Decimal Numbers on Number Lines



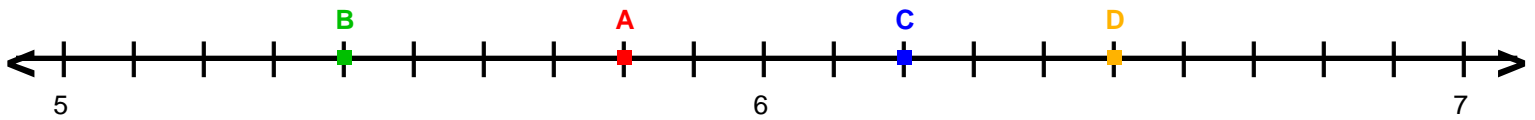
A = 6.8 B = 7.5 C = 6.2 D = 6.6



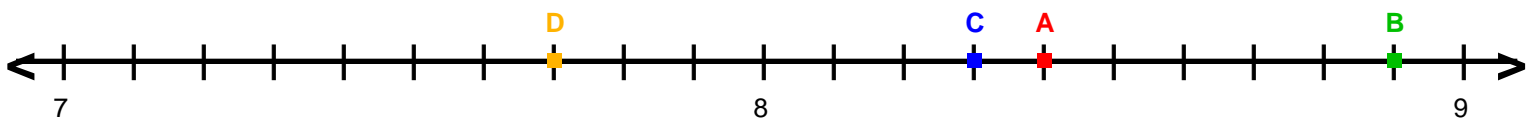
A = 2.4 B = 2.8 C = 1.6 D = 2.7



A = 4.4 B = 5.2 C = 4.7 D = 5.3



A = 5.8 B = 5.4 C = 6.2 D = 6.5



A = 8.4 B = 8.9 C = 8.3 D = 7.7