

2. razred
OŠ Šmarje pri Kopru

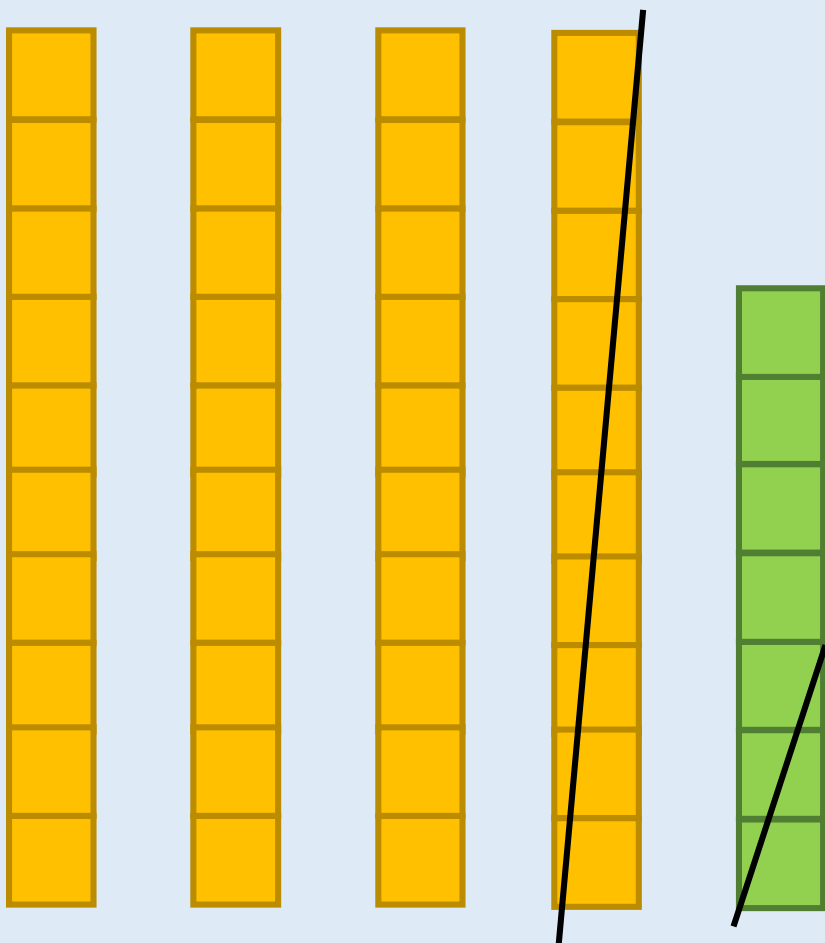


ODŠTEVAMO DO
100
(DE - DE = DE)



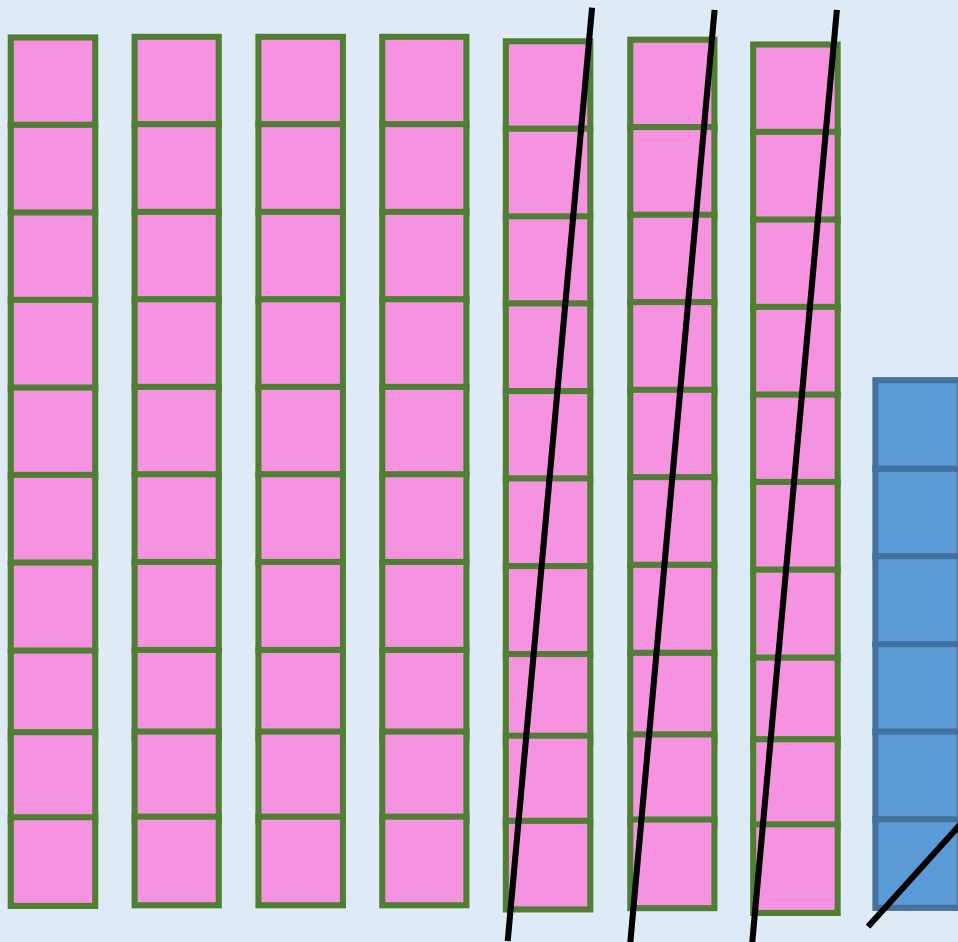
$$47 - 13 = 37 - 3 = 34$$

10 3





$$76 - 31 = 46 - 1 = 45$$


30 1



$$83 - 52 = 33 - 2 = 31$$



$$68 - 15 = 53$$


$$39 - 23 = 16$$


1	2	3	4	5	6	7	8	9	10
11	12	13	14	15	16	17	18	19	20
21	22	23	24	25	26	27	28	29	30
31	32	33	34	35	36	37	38	39	40
41	42	43	44	45	46	47	48	49	50
51	52	53	54	55	56	57	58	59	60
61	62	63	64	65	66	67	68	69	70
71	72	73	74	75	76	77	78	79	80
81	82	83	84	85	86	87	88	89	90
91	92	93	94	95	96	97	98	99	100

Pomoč s stotičnim kvadratom:

$$38 - \overset{20}{\underset{\diagdown}{2}}\overset{5}{\diagup}{5} = 13$$

Natančno opazuj sliko in jo primerjaj z zapisano enakostjo pod njo. Koliko jajc ni prečrtanih?



Prečrtanih ni 34 jajc.

$$67 - 33 = \boxed{34}$$

Prepiši v zvezek in reši.

$85 - 14 = \square$

$64 = 87 - \square$

$97 - \square = 52$

$\square - 43 = 15$

$63 - 32 = \square$

$55 = 98 - \square$

$78 - \square = 34$

$\square - 31 = 16$

$94 - 21 = \square$

$76 = 89 - \square$

$66 - \square = 43$

$\square - 54 = 22$

$76 - 43 = \square$

$47 = 99 - \square$

$89 - \square = 25$

$\square - 22 = 22$

BRAVO, URA JE KONČANA!

