
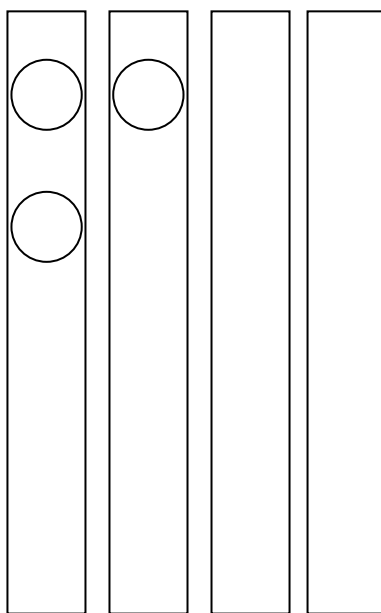

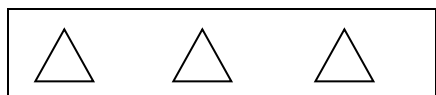


NA POLJA NARIŠI TOLIKO LIKOV, KOT ZAHTEVA ZAPIS POD NJIMI. ZAPIŠIM ŠE USTREZNE RAČUNE SEŠTEVANJA IN MNOŽENJA.



$3 + 3 + 3 + 3 + 3 = \underline{\quad}$	$4 + \underline{\quad} = \underline{\quad}$	$\underline{\quad} = \underline{\quad}$
$5 \cdot 3 = \underline{\quad}$	$\underline{\quad} \cdot \underline{\quad} = \underline{\quad}$	$\underline{\quad} \cdot \underline{\quad} = \underline{\quad}$
PET KRAT TRI JE $\underline{\quad}$.	ŠTIRI KRAT ŠTIRI JE $\underline{\quad}$.	DVA KRAT PET JE $\underline{\quad}$.



KOLIKO PIK JE NA KOCAH? ZAPIŠI Z RAČUNOM SEŠTEVANJA IN MNOŽENJA.

	$5 + \underline{\quad} = \underline{\quad}$	$3 \cdot \underline{\quad} = \underline{\quad}$