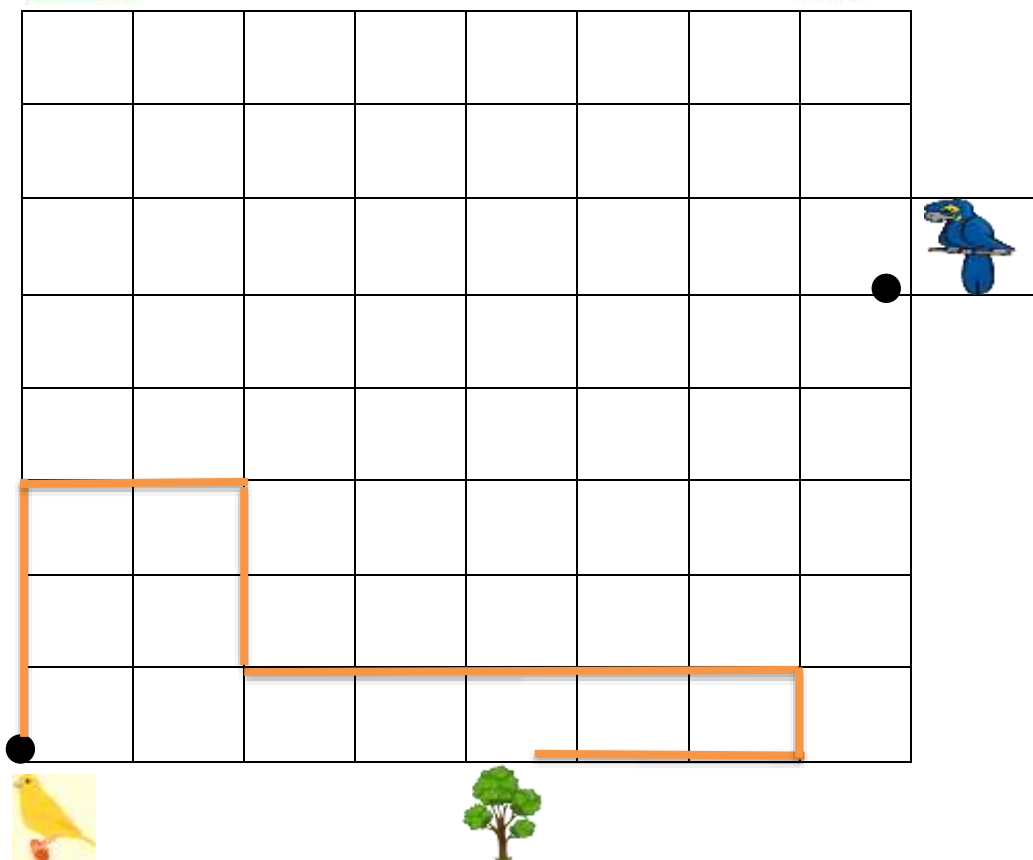
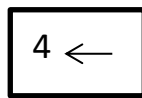
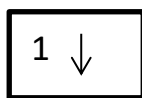
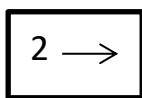
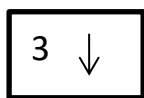
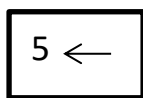


1. NARIŠI PAPIGINO POT, KOT KAŽE NAVODILO.

2. S  OZNAČI KANARČKOVO POT DO CILJA.



3. IZRAČUNAJ

$5 + 9 = \square$

$7 + 7 = \square$

$15 - 9 = \square$

$12 - 9 = \square$

$16 - 9 = \square$

$8 + 9 = \square$

$16 - 7 = \square$

$3 + 9 = \square$

$4 + 7 = \square$

$6 + 8 = \square$

$15 - 8 = \square$

$13 - 6 = \square$

$17 - 8 = \square$

$4 + 7 = \square$

$9 + 7 = \square$

$19 - 9 = \square$

$7 + 6 = \square$

$8 + 3 = \square$

$16 - 8 = \square$

$20 - 6 = \square$