

Odštevanje

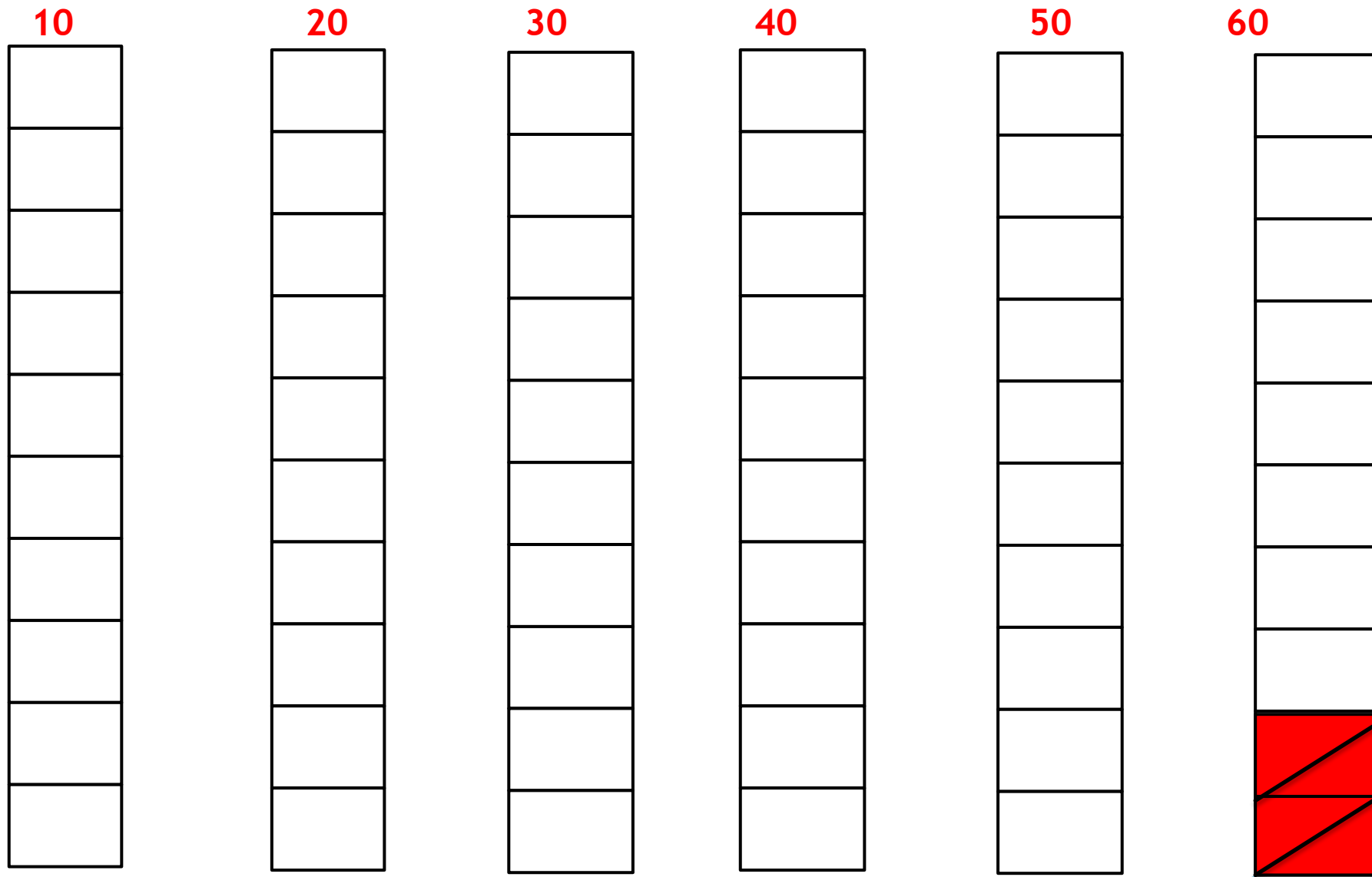
$$D - E = DE$$

$$60 - 2 = 58$$

2. razred OŠ Šmarje pri Kopru

MINUS





$$60 - 2 =$$

Imamo 6 stolpcev torej 6 D. Če želimo odšteti 2, moramo pri zadnjem stolpcu vzeti 2 kocki –odvzamemo 2 enici. Ostane nam 5 stolpcev in 8 kock **5D** in **8E**, torej število 58..

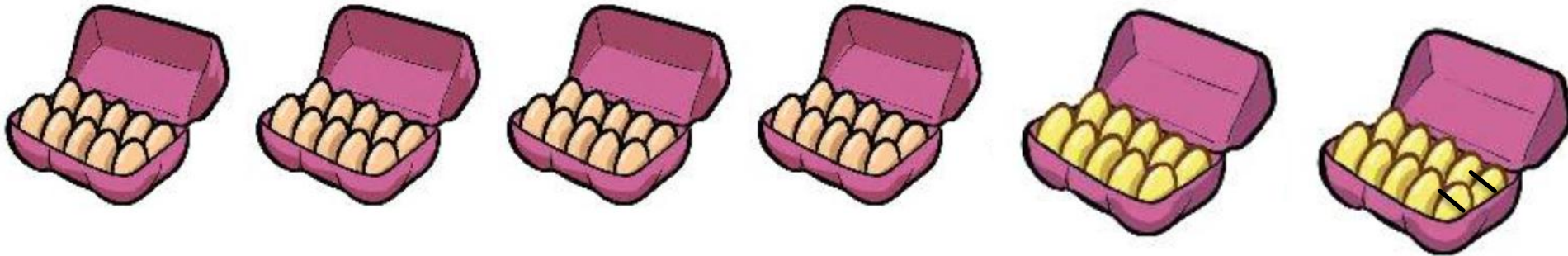
Račun ponazorimo tudi
s premikanjem po stotičnem
kvadratu.

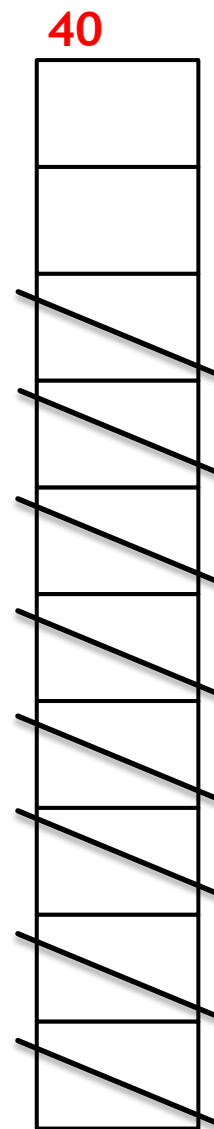



$$60 - 2 = 58$$

1	2	3	4	5	6	7	8	9	10
11	12	13	14	15	16	17	18	19	20
21	22	23	24	25	26	27	28	29	30
31	32	33	34	35	36	37	38	39	40
41	42	43	44	45	46	47	48	49	50
51	52	53	54	55	56	57	58	59	60
61	62	63	64	65	66	67	68	69	70
71	72	73	74	75	76	77	78	79	80
81	82	83	84	85	86	87	88	89	90
91	92	93	94	95	96	97	98	99	100

**Račun ponazorimo tudi
s slikovnim prikazom.**

$$60 - 2 = 58$$






Prikaz v stolpcih.

$$40 - 8 = 32$$

$$40 - 8 = 32$$

1	2	3	4	5	6	7	8	9	10
11	12	13	14	15	16	17	18	19	20
21	22	23	24	25	26	27	28	29	30
31	32	33	34	35	36	37	38	39	40
41	42	43	44	45	46	47	48	49	50
51	52	53	54	55	56	57	58	59	60
61	62	63	64	65	66	67	68	69	70
71	72	73	74	75	76	77	78	79	80
81	82	83	84	85	86	87	88	89	90
91	92	93	94	95	96	97	98	99	100



- ▶ Še enkrat si oglej U, stran 74 in če želiš reši račune pri 17 in 18. nalogi.

Kmet je v kurniku pobral 40 jajc. Tri so mu padla na tla in se razbila.

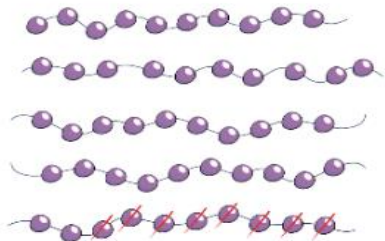
Koliko celih jajc še ima?



$$40 - 3 = 37$$


Kmet ima še 37 celih jajc.

Oglej si sliko. Preberi račun.



$$50 - 8 = 42$$

16. Oglej si sliko. Napiši račun.



17. Odštej.

$10 - 2 = \underline{\quad}$

$10 - 4 = \underline{\quad}$

$10 - 5 = \underline{\quad}$

$50 - 2 = \underline{\quad}$

$90 - 4 = \underline{\quad}$

$50 - 5 = \underline{\quad}$

$70 - 2 = \underline{\quad}$

$20 - 4 = \underline{\quad}$

$30 - 5 = \underline{\quad}$

18. Odštej.

$80 - 1 = \underline{\quad}$

$60 - 6 = \underline{\quad}$

$90 - 2 = \underline{\quad}$

$60 - 3 = \underline{\quad}$

$40 - 4 = \underline{\quad}$

$80 - 4 = \underline{\quad}$

$40 - 5 = \underline{\quad}$

$80 - 2 = \underline{\quad}$

$70 - 3 = \underline{\quad}$

$20 - 7 = \underline{\quad}$

$60 - 2 = \underline{\quad}$

$60 - 9 = \underline{\quad}$

$30 - 7 = \underline{\quad}$

$40 - 6 = \underline{\quad}$

$100 - 8 = \underline{\quad}$